


Simple, but Tough Worksheet

Directions: Machines help make work easier! All machines rely on simple machines to function. Can you determine which simple machine is represented by each picture?


LEVER	WHEEL AND AXEL	PULLEY	INCLINED PLANE	WEDGE	SCREW
-------	----------------	--------	----------------	-------	-------



1. _____



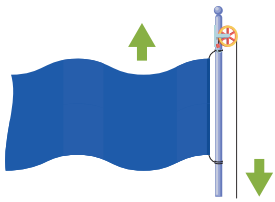
2. _____



3. _____



4. _____



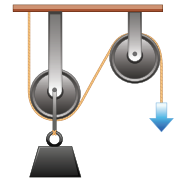
5. _____



6. _____




7. _____




8. _____



9. _____




10. _____



11. _____




12. _____



13. _____



14. _____



15. _____



16. _____




17. _____



18. _____



19. _____



20. _____