

Simple, but Tough Answers

Directions: Machines help make work easier! All machines rely on simple machines to function. Can you determine which simple machine is represented by each picture?


LEVER	WHEEL AND AXEL	PULLEY	INCLINED PLANE	WEDGE	SCREW
-------	----------------	--------	----------------	-------	-------



1. LEVER



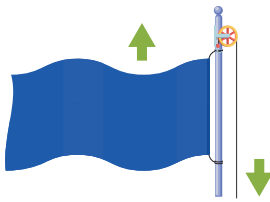
2. WHEEL AND AXEL



3. WEDGE



4. INCLINED PLANE



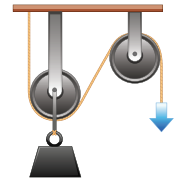
5. PULLEY



6. SCREW



7. WHEEL AND AXEL




8. PULLEY



9. LEVER



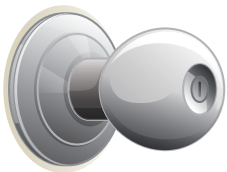
10. WEDGE



11. SCREW



12. WHEEL AND AXEL



13. WHEEL AND AXEL



14. INCLINED PLANE



15. WEDGE




16. LEVER




17. SCREW



18. INCLINED PLANE



19. LEVER



20. PULLEY